

ISTITUTO COMPRENSIVO "UGO FOSCOLO" DI VESCOVATO
Scuola Primaria di

Primo quadrimestre

Verifica di matematica

Criteri di valutazione

N° 1, 2, 10	Esatte	
	10/10	10
	9/10	9
	8/10	8
	7/10	7
	6/10	6
N° 4, 5, 7, 8, 9	Esatte	
	9/9	10
	8/9	9
	7/9	8
	6/9	7
	5/9	6
N° 6	Esatte	
	16/16	10
	15 -14/16	9
	13 -12/16	8
	11 -10/16	7
	9 -8/16	6
N° 3	Esatte	
	5/5	10
	4/5	8
	3/5	6

OK

ISTITUTO COMPRENSIVO "UGO FOSCOLO" DI VESCOVATO
Scuola Primaria di



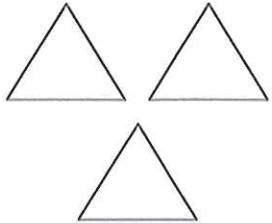





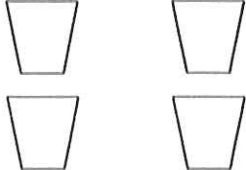
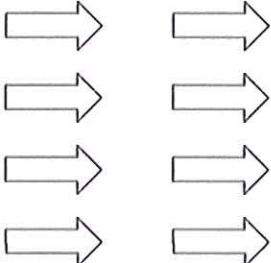
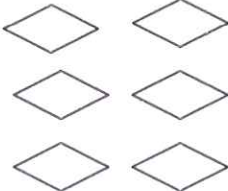
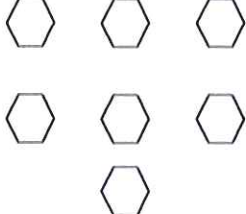
Primo quadrimestre

Verifica di matematica

NOME.....

DATA.....

1. COLORA SOLO IL GRUPPO DI OGGETTI CHE CORRISPONDE AL NUMERO

4 QUATTRO			
6 SEI			
1 UNO			
7 SETTE			

NOME..... DATA.....

4. SCRIVI IL SUCCESSIVO DI OGNI NUMERO

1	
---	--

8	
---	--

5	
---	--

4	
---	--

2	
---	--

7	
---	--

6	
---	--

3	
---	--

0	
---	--

--	--

5. SCRIVI IL PRECEDENTE DI OGNI NUMERO

	8
--	---

	5
--	---

	2
--	---

	4
--	---

	3
--	---

	1
--	---

	5
--	---

	9
--	---

	6
--	---

--	--

6. SCRIVI IL PRECEDENTE E IL SUCCESSIVO DI OGNI NUMERO

	2	
--	---	--

	1	
--	---	--

	3	
--	---	--

	6	
--	---	--

	4	
--	---	--

	8	
--	---	--

	5	
--	---	--

	7	
--	---	--

--	--	--

7. SCRIVI IL NUMERO CHE STA TRA I DUE NUMERI INDICATI

2		4
---	--	---

1		3
---	--	---

7		9
---	--	---

5		7
---	--	---

3		5
---	--	---

0		2
---	--	---

5		7
---	--	---

4		6
---	--	---

6		8
---	--	---

--	--	--

VALUTAZIONE.....

NOME..... DATA.....

3. COMPLETA CON I NUMERI MANCANTI

	1		3	4	5		7		9	
--	---	--	---	---	---	--	---	--	---	--

0			3	4		6		8		
---	--	--	---	---	--	---	--	---	--	--











0		2		4			7		9	
---	--	---	--	---	--	--	---	--	---	--

0	1			4		6		8		
---	---	--	--	---	--	---	--	---	--	--




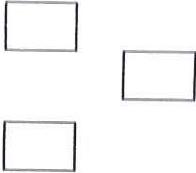



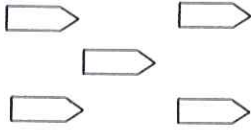

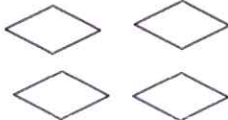
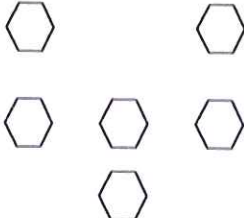


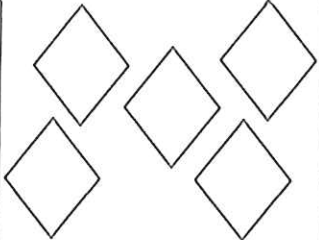

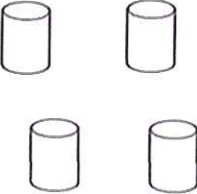

	1						7	8		
--	---	--	--	--	--	--	---	---	--	--

VALUTAZIONE

2. DISEGNA IL CORPO DEI BRUCHI COMPLETANDOLO CON GLI ANELLI SECONDO IL NUMERO INDICATO NELLA CASELLA.
(COLORA POI IL BRUCO CON IL COLORE DEI REGOLI)

1	
5	
7	
10	
2	
0	
4	
8	
6	
9	

VALUTAZIONE

<p>2 DUE</p>			
<p>9 NOVE</p>			
<p>5 CINQUE</p>			
<p>0 ZERO</p>			
<p>8 OTTO</p>			
<p>9 NOVE</p>			

VALUTAZIONE:.....

NOME..... DATA.....

8. COLORA LA CASELLA CON IL NUMERO MAGGIORE

8	4
---	---

7	3
---	---

7	5
---	---

1	3
---	---

2	1
---	---

6	4
---	---

5	9
---	---

4	9
---	---

7	2
---	---

VALUTAZIONE

--

9. COLORA LA CASELLA CON IL NUMERO MINORE

5	2
---	---

4	7
---	---

2	5
---	---

8	9
---	---

5	9
---	---

2	3
---	---

5	9
---	---

4	3
---	---

6	4
---	---

8	4
---	---

VALUTAZIONE

--

10. METTI IL SEGNO $>$, $<$, $=$ TRA I DUE NUMERI

5 7

4 4

9 2 6 3

2 6

8 5

3 3 9 5

4 8

7 3

VALUTAZIONE

--